

## **AR212 - History of Architecture**

Date: Friday 11<sup>th</sup> June, 2021  
Time: 12.50pm  
Room: L2  
Duration: 3 hours

### **Instruction to Candidates:**

- 1.0 You have 10 minutes to read the paper.  
You must not begin writing during this time.
- 2.0 All answers must be written on the answer book(s) provided
- 3.0 Print your name and student identification number on the answer book(s) provided.  
Do it now.
- 4.0 No reference material is allowed in the examination room.
- 5.0 No mobile phones allowed in the Examination Room. Alternatively, switch off and put in your bag and leave at the front of the room.

### **Format of Examination Paper:**

This examination paper has two(2) parts:

- Part 1 – Image Identification – you will be required to correctly name the images shown in the various pictures.
- Part 2 – Short Answers – you will be required to provide short answers to the questions you choose

## Part 1 – Image Identification

Correctly identify the image shown in each of the Figures given below. Each question is worth 3 marks.

- (a) Correctly name the image
- (b) Correctly name the architectural style




Image 1

- (a) What is the name of this structure
- (b) What is the architectural style



Image 2

- (a) What is the name of this structure
- (b) What is the architectural style




Image 3

- (a) What is the name of this structure
- (b) What is the architectural style


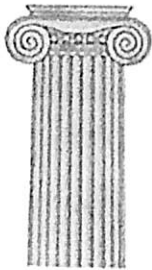


Image 4

- (a) What is the name of this structure
- (b) What is the architectural style



Doric



Ionic



Corinthian



Tuscan



Composite

Image 5

- (c) What is the name given to the images given above.
- (d) What architectural style(s) use these images

## Part 2 – Short Answers

**(i) Choose any four (4) questions from the list given below to answer. Each question is worth 3 marks.**

**Question No.1 ( 3 marks)**

Large and fertile river systems (such as the Nile, Yangtse, etc) have been credited with the first sites for the establishment of human settlements. Explain why this was the case.

**Question No.2 ( 3 marks)**

Explain the role of the architect in the creation and development of cities.

**Question No.3 ( 3 marks)**

What gives rise to architectural styles. Explain

**Question No.4 (3 marks)**

Who was Emperor Constantine and why is he an important person in history?

**Question No.5 (3 marks)**

Identify 3 components of an early Christian cathedral

**(ii) Choose any four (4) questions from the list given below to answer. Each question is worth 4 marks.**

**Question No.6 ( 4 marks)**

The Mediterranean Sea is considered to be the cradle of Western Civilisation. Explain

**Question No.7 ( 4 marks)**

List four (4) contributions made by the Greeks to the world

**Question No.8 ( 4 marks)**

List four (4) Roman inventions.

**Question No.9 ( 4 marks)**

The Gothic architectural style can be distinguished by at least 4 characteristics. List these characteristics

**Question No.10 (4 marks)**

- (a) What are some of the main characteristics of Baroque architecture
- (b) Name the architects who were involved in the design of the St Peters Basilica and the St Peters Square